





# Volume du cube et du pavé


Combien y a-t-il de cubes ?




Réponse :




Réponse :




Réponse :



Réponse :



Réponse :



Réponse :