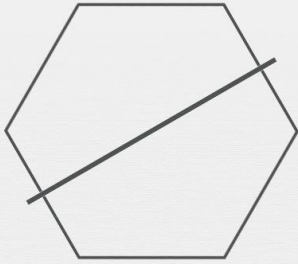





Symétrie axiale

L'axe dessiné est-il un axe de symétrie ?



oui

non



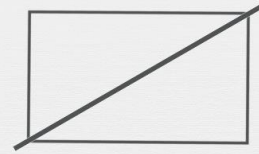
oui

non



oui

non



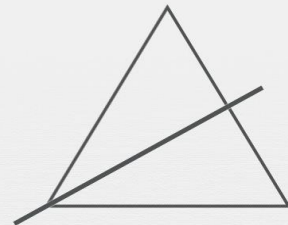
oui

non



oui

non



oui

non