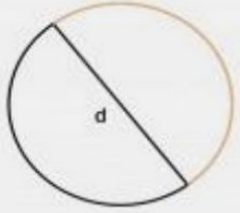




Périmètre du cercle

Trouves la longueur de la partie orange du cercle



$$P = \frac{\pi \times d}{2}$$

$$d = 5 \text{ cm}$$

$$\pi \approx 3.14$$

$$P \approx \text{ cm}$$



$$P = \frac{\pi \times d}{4}$$

$$d = 3 \text{ cm}$$

$$\pi \approx 3.14$$

$$P \approx \text{ cm}$$

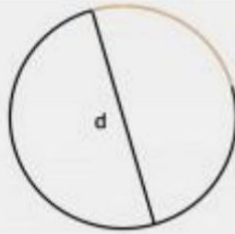


$$P = \frac{\pi \times d}{4}$$

$$d = 2 \text{ cm}$$

$$\pi \approx 3.14$$

$$P \approx \text{ cm}$$

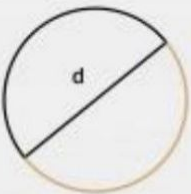


$$P = \frac{\pi \times d}{4}$$

$$d = 5 \text{ cm}$$

$$\pi \approx 3.14$$

$$P \approx \text{ cm}$$



$$P = \frac{\pi \times d}{2}$$

$$d = 4 \text{ cm}$$

$$\pi \approx 3.14$$

$$P \approx \text{ cm}$$



$$P = \frac{\pi \times d}{2}$$

$$d = 2 \text{ cm}$$

$$\pi \approx 3.14$$

$$P \approx \text{ cm}$$