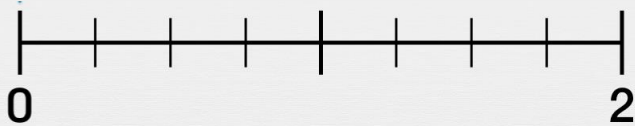


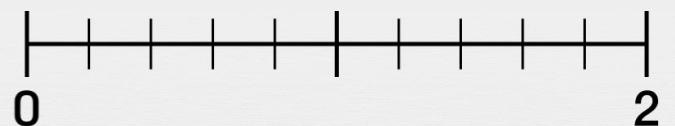


Axes gradués : les fractions

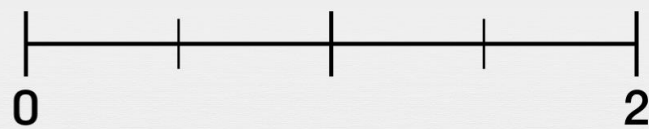
Place correctement le point sur l'axe gradué.



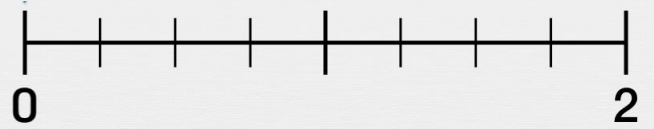
Le point B d'abscisse $\frac{6}{4}$



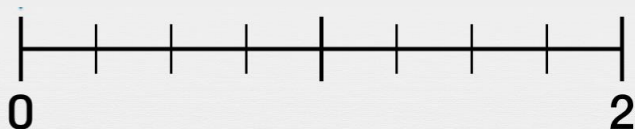
Le point R d'abscisse $\frac{8}{5}$




Le point P d'abscisse $\frac{1}{2}$



Le point M d'abscisse $\frac{7}{4}$



Le point Z d'abscisse $\frac{5}{4}$



Le point X d'abscisse $\frac{2}{2}$